

Gr. 2 U7 Parts of Whole Parts of Groups Pre

Name: _____ **Date:** _____

Class: _____

Directions: Listen to me read each question carefully and circle the letter to the **BEST** answer.

- 1) What part of the flag is **NOT** shaded?



A) $\frac{1}{2}$

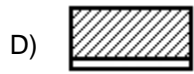
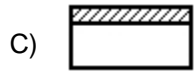

B) $\frac{1}{3}$

C) $\frac{2}{3}$

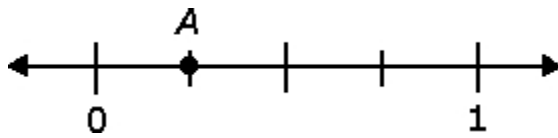
D) $\frac{1}{4}$

Gr. 2 U7 Parts of Whole Parts of Groups Pre

2) Which shows $\frac{1}{2}$ shaded?



3) What fraction tells where point A is on the number line below?



A) $\frac{1}{4}$

B) $\frac{1}{3}$

C) $\frac{1}{2}$

D) $\frac{2}{3}$

Gr. 2 U7 Parts of Whole Parts of Groups Pre

4) Which fraction is one-half?

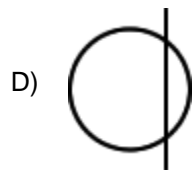
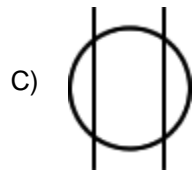
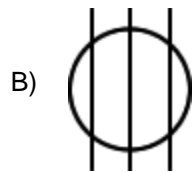
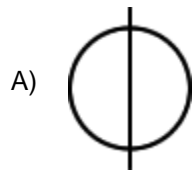
A) $\frac{1}{2}$

B) $\frac{1}{4}$

C) $\frac{1}{3}$

D) 1 whole

5) Which picture shows all equal parts?



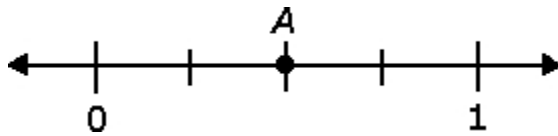
Gr. 2 U7 Parts of Whole Parts of Groups Pre

- 6) How many letters would you circle to show half?

D D D D
D D D D

- A) 1
B) 2
C) 3
D) 4
-


- 7) What fraction tells where point *A* is on the number line below?



- A) $\frac{1}{4}$
B) $\frac{1}{2}$
C) $\frac{2}{3}$
D) $\frac{3}{4}$
-

Gr. 2 U7 Parts of Whole Parts of Groups Pre

- 8) Jen wants to divide these star stickers into fourths. How many stickers should be in each group?



- A) 1
 - B) 2
 - C) 3
 - D) 4
-

- 9) Kim has to share her candy with 3 friends. If Kim has 100 pieces of candy, how many pieces would Kim and each friend get?

- A) 10
 - B) 20
 - C) 25
 - D) 50
-

- 10) Ella wants to divide the pumpkins into thirds. How many pumpkins will be in each group?



- A) 2
 - B) 3
 - C) 4
 - D) 6
-